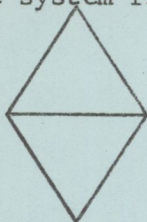



6. The system flow chart symbol for sorting is

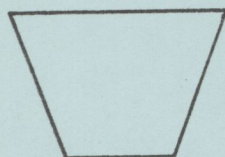
a.




b.



c.



d.



e. none of the above.

7. Which of the following is not an example of support software?

- a. language translators.
- b. communications software.
- c. the operating system.
- d. programs to compute support payments to welfare mothers.
- e. none of the above.

8. How many total memory locations would be reserved by the following statement?

DIMENSION SALES(3,9), RATE(10,40), TOT(50)

- a. 3
- b. 477
- c. 5
- d. 112
- e. none of the above.

9. In a table look up on equal, normal exit from the table look-up DØ loop indicates that

- a. the test value of the DØ statement is too small.
- b. there is a syntax error in the program.
- c. the argument array contains an element whose value equals the search argument.
- d. the argument array does not contain an element whose value equals the search argument.
- e. none of the above.

10. The MNF (E=2) card which we used in each of our lab programs is an example of what language?

- a. BMD
- b. FØRTRAN
- c. job control language.
- d. machine language.
- e. none of the above.